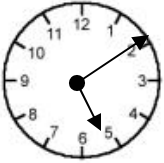


Name _____ Date _____

Cool Colons!

We use *colons* to help us tell time. We put a *colon* between the hours and the minutes. The hours should be on the left of the colon, and the minutes should be on the right.

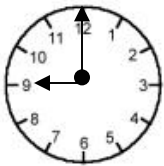


The hour is 5 o'clock.

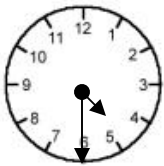
It is 10 minutes past 5.

5:10

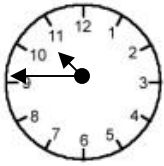
Directions: Circle the correct time. Write it on the line using a colon.



90:0 :900 9:00 _____



4:30 43:0 430: _____



104:5 10:45 1:045 _____

Fill in your own time. Write the time on the line using a colon.

