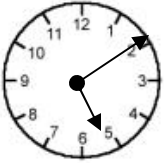


Name _____ Date _____

More Cool Colons!

We use *colons* to help us tell time. We put a *colon* between the hours and the minutes. The hours should be on the left of the colon, and the minutes should be on the right.

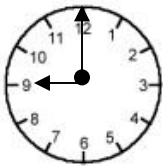


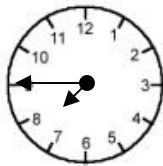
The hour is 5 o'clock.

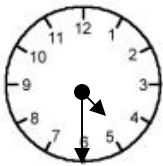
It is 10 minutes past 5.

5:10

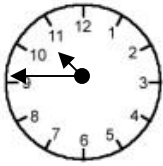
Directions: Write the correct time on the line using a colon.

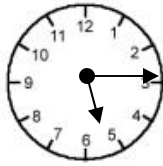












Fill in your own time. Write the time on the line using a colon.



